



Use the numberlines to find the absolute value.

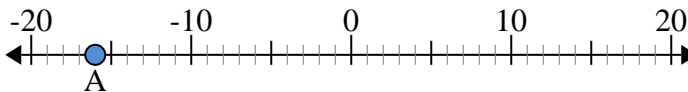
Answers

- 1) a. What is the value of 'A'?
- b. How far is 'A' from 0 (absolute value)?



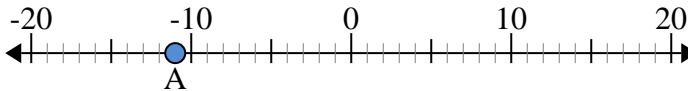
1. \_\_\_\_\_

- 2) a. What is the value of 'A'?
- b. How far is 'A' from 0 (absolute value)?



2. \_\_\_\_\_

- 3) a. What is the value of 'A'?
- b. How far is 'A' from 0 (absolute value)?



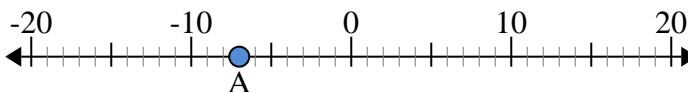
3. \_\_\_\_\_

- 4) a. What is the value of 'A'?
- b. How far is 'A' from 0 (absolute value)?



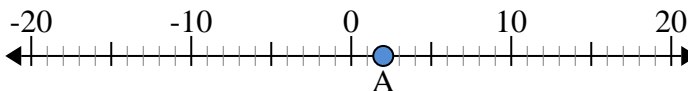
4. \_\_\_\_\_

- 5) a. What is the value of 'A'?
- b. How far is 'A' from 0 (absolute value)?



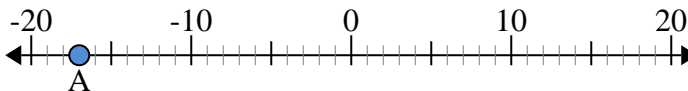
5. \_\_\_\_\_

- 6) a. What is the value of 'A'?
- b. How far is 'A' from 0 (absolute value)?



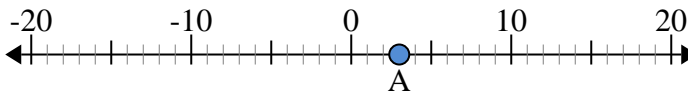
6. \_\_\_\_\_

- 7) a. What is the value of 'A'?
- b. How far is 'A' from 0 (absolute value)?



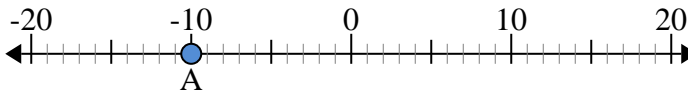
7. \_\_\_\_\_

- 8) a. What is the value of 'A'?
- b. How far is 'A' from 0 (absolute value)?



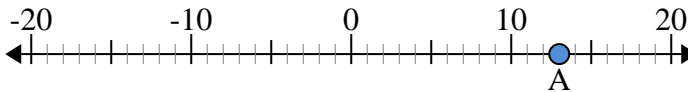
8. \_\_\_\_\_

- 9) a. What is the value of 'A'?
- b. How far is 'A' from 0 (absolute value)?



9. \_\_\_\_\_

- 10) a. What is the value of 'A'?
- b. How far is 'A' from 0 (absolute value)?

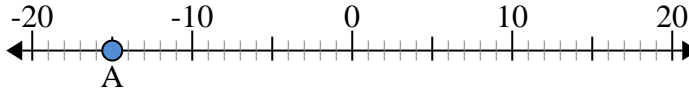


10. \_\_\_\_\_

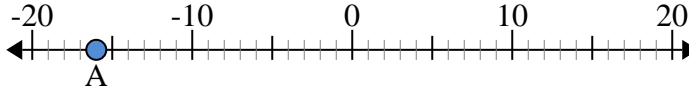


Use the numberlines to find the absolute value.

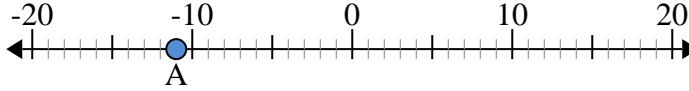
- 1) a. What is the value of 'A'?  
b. How far is 'A' from 0 (absolute value)?



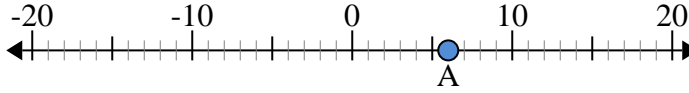
- 2) a. What is the value of 'A'?  
b. How far is 'A' from 0 (absolute value)?



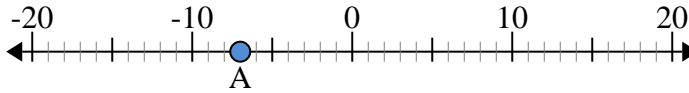
- 3) a. What is the value of 'A'?  
b. How far is 'A' from 0 (absolute value)?



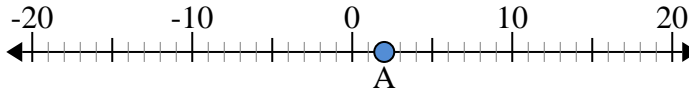
- 4) a. What is the value of 'A'?  
b. How far is 'A' from 0 (absolute value)?



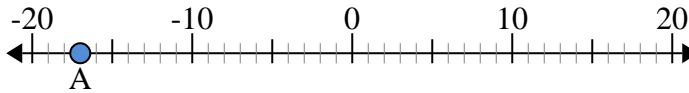
- 5) a. What is the value of 'A'?  
b. How far is 'A' from 0 (absolute value)?



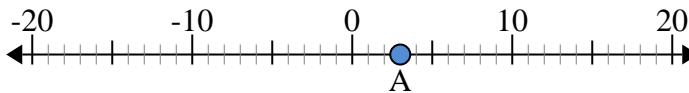
- 6) a. What is the value of 'A'?  
b. How far is 'A' from 0 (absolute value)?



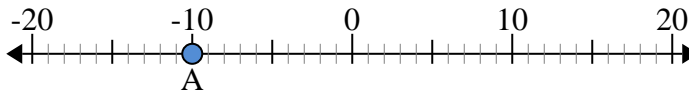
- 7) a. What is the value of 'A'?  
b. How far is 'A' from 0 (absolute value)?



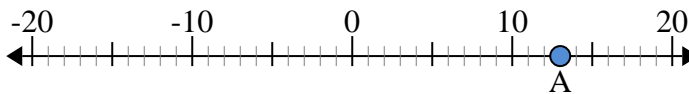
- 8) a. What is the value of 'A'?  
b. How far is 'A' from 0 (absolute value)?



- 9) a. What is the value of 'A'?  
b. How far is 'A' from 0 (absolute value)?



- 10) a. What is the value of 'A'?  
b. How far is 'A' from 0 (absolute value)?



Answers

1.	<u>-15</u>	<u>15</u>
2.	<u>-16</u>	<u>16</u>
3.	<u>-11</u>	<u>11</u>
4.	<u>6</u>	<u>6</u>
5.	<u>-7</u>	<u>7</u>
6.	<u>2</u>	<u>2</u>
7.	<u>-17</u>	<u>17</u>
8.	<u>3</u>	<u>3</u>
9.	<u>-10</u>	<u>10</u>
10.	<u>13</u>	<u>13</u>